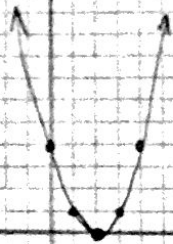


① Identify Vertex, & a value, and axis of symmetry

S.I.M.

Name \_\_\_\_\_

vertex



"a"

axis of symmetry

Equation:



Equation:



Equation:



Equation:



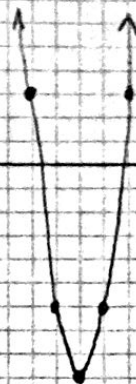
Equation:



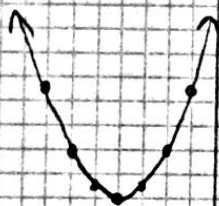
Equation:



Equation:



Equation:



Equation:



Equation:



Equation:

Create your own & sketch.

Equation: